

KAMPALA PARENTS' SCHOOL 2004
PRE-MOCK EXAMINATION- 2022
SOCIAL STUDIES & RELIGIOUS EDUCATION
TIME: 2 HOURS 15 MINUTES

NAME: _____

SCHOOL _____ **INDEX NO.** _____

DO NOT OPEN THIS BOOKLET UNTIL YOU ARE TOLD TO DO SO

Read the following instructions carefully.

1. This paper is made up of two Sections: A and B.
2. Answers to both sections must be written in the spaces provided in full sentences.
3. Section A has 40 questions (40 marks)
4. Section B has 15 questions (60 marks)
5. Attempt all questions. All answers to both sections A and B must be written in the spaces provided.

FOR EXAMINERS USE ONLY		
QN. NO.	MARK	SIGN
1 - 10		
11 - 20		
21 - 30		
31 - 40		
41 - 43		
44 - 46		
47 - 49		
50 - 52		
53 - 55		

Section A

1. Name the symbol on a map used to calculate distance between two places.

2. What is the major economic activity carried out around lake Albert in Uganda?

3. Why is the government of Uganda encouraging women to form SACCOS?

4. Name the major line of longitude marked 0° degrees.

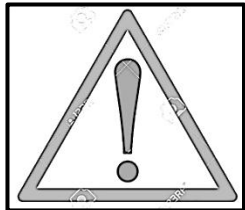
5. Why is a radio an effective means of communicating to people in rural areas?

6. State one-way East African countries will benefit from DRC after joining the East African Community.

7. Give a reason why it is important to have laws in the community.

8. What makes Dr. Julius Kambarage Nyerere popular in East Africa?

9. When is the road sign below placed on the road?



10. How did the Indian Coolies contribute to the end of Slave trade in East Africa?

11. Write L.D.U. full.

12. In which climatic region are Oases common?

13. Give any one reason why old kingdoms had strong armies.

14.State one way a school can promote good relationship with her neighborhood.

15.Why is Swamp drainage regarded as a bad practice?

16.Mention one way a health Centre can improves the welfare of people in the community.

17.Give a reason why Nelson Mandela was against apartheid rule in South Africa.

18.What is the major plantation crop grown in Kalangala district in Uganda?

19.What type of house is shown below?



20.Give a reason to support your answer.

21.What makes Ethiopia popular in relation to African Union?

22.How has Entebbe International airport contributed to the economic development of Uganda?

23.What title is given to the Officer at the district responsible for supervising civil servants?

24.Mention any one danger of **floods** to the community.

25.How did Alexander Mackay’s printing press promote the spread of Christianity in East Africa?

26.Mention the type of weather that may require a school child to carry the item below.



27. Name the trade that was conducted by the people of West Africa, North America and Europe across the Atlantic Ocean.

28. Give a reason why the Germans faced a lot of resistance in Tanganyika.

29. How did the Luo people contribute to the collapse of Bunyoro-Kitara Empire?

30. State any one way **Covid19** has affected the tourism industry in Uganda.

31. What is Immigration?

32. What name was given to the Law making body during the colonial period?

33. Mention one factor that has led to increased destruction of natural forest in Uganda.

34. State one way a head teacher can promote security at school.

35. Apart from taxes, mention any other source of revenue to the districts.

For questions 36 - 40, answer either Christianity or Islam but not both.

36. **Either:** Who led the Israelites to the Promised Land?

Or: Who led the Ban-Israelites to the Promised Land?

37. **Either:** Give **one** symbol of the Holy Spirit on the day of Pentecost.

Or: Give **one** symbol of Islam.

38. **Either:** Mention any **one** way Christians benefit from attending church services (mass).

Or: Mention any **one** way Muslims benefit from attending regular prayers.

39. **Either:** Name any one way Jesus bridged the gap between God and mankind.

Or: Name any one-way Prophet Muhammad perfected Islam.

40. **Either:** Write down any one thing that Christians observe during Lent period.

Or: Write down any one thing Muslims observe during Saum.

SECTION B (60 MARKS)

41. a) What are Social Activities?

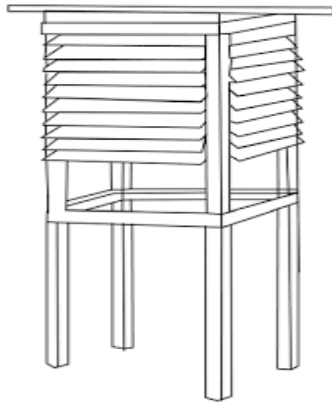
b) Give any two examples of social activities carried out in our communities.

i) _____

ii) _____

c) How do social activities unite people?

42. **Study the diagram below and answer the questions that follow:**



a) Name the feature shown in the diagram above.

b) Write down any two weather instruments kept in the above feature.

i) _____

ii) _____

c) Why is the feature shown above painted white?

43. **Complete the table below correctly:**

Service provider	Service centre
Midwife
.....	Cares for our teeth
Barber
.....	Mends our shoes.

44. a) What makes **Vasco da Gama** popular in Africa?

b) Mention any two positive results of the Portuguese rule in East Africa.

i) _____

ii) _____

c) Why did the Portuguese develop conflicts with the Arabs at the East African coast?

45. a) Name the last Bantu tribe to enter East Africa.

b) Give any two reasons why the Bantu settled along river valleys in East Africa.

i) _____

ii) _____

c) State one way the Bantu influenced the life of the Plain Nilotes in East Africa.

46. a) Name the group of people who founded Bunyoro-Kitara Empire.

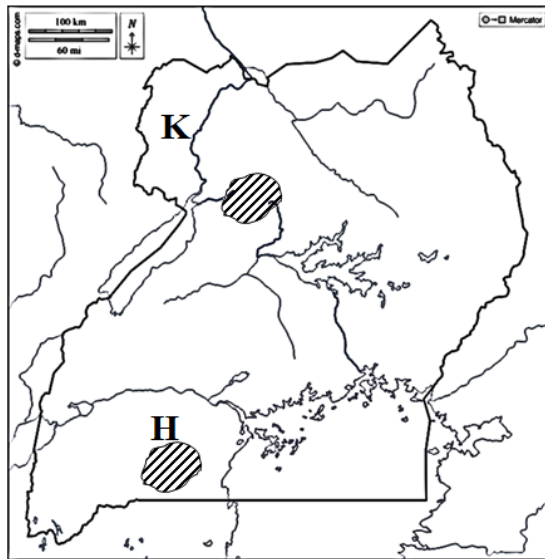
b) Write down any **two** activities that the Chwezi are remembered for in Uganda.

i) _____

ii) _____

c) Mention the last dynasty that ruled Bunyoro-Kitara Empire.

47. **Study the map of Uganda below and answer the questions that follow:**



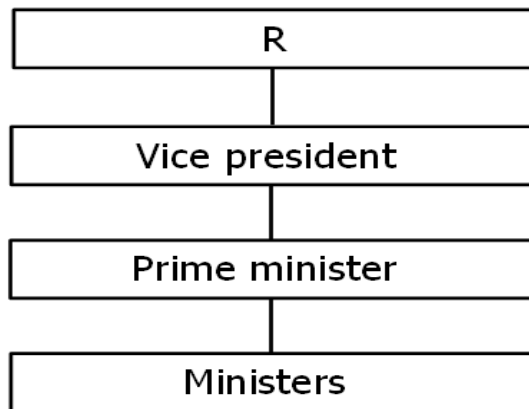
a) Name the game park marked **H**.

b) Use letter **M** to show Kidepo Valley National Game Park.

c) Name the major ethnic group in region marked **K**.

d) Give **one** reason why animals are found in different vegetation zones.

48. **Study the diagram below and answer the questions that follow:**



a) Name the part marked **R**.

b) Which organ of government is represented by the diagram above?

c) Write down any **two** importance of the organ you have named in (b) above.

i) _____

ii) _____

49.a) Give any **two** reasons why the government carries out a population census.

i) _____

ii) _____

b) Why is a population census carried out after 10 years?

c) Mention any one problem **enumerators** face when carrying out population Census.

50.a) In which country did the Berlin conference of 1884-5 take place?

b) What role did Chancellor Otto Von Bismarck play in the colonization of Africa?

c) State any two ways the Berlin conference affected Africa.

i) _____

ii) _____

For questions 51 – 55, answer either Christianity or Islam but not both

51. Either:

a) Mention any **two** gospel books in the Bible.

i) _____

ii) _____

b) Write down any **two** ways Christians benefit from reading the Bible.

i) _____

ii) _____

Or:

a) Mention the books that were received by the following prophets:

i) Dauda _____

ii) Musa _____

b) Write down any **two** ways Muslims benefit from reading the Bible.

i) _____

ii) _____

52. Either:

a) Mention any two Christian values.

i) _____

ii) _____

b) State any two ways some Christians have failed to live to God's expectations.

i) _____

ii) _____

Or:

a) State any two Muslim values.

i) _____

ii) _____

b) State any two ways some Muslim have failed to live to Allah's expectations.

i) _____

ii) _____

53. Either:

a) Write down the place where sinners will go on the day of Judgement.

b) Write down any **two** things that will cause people to go to the place mentioned in (a) above.

i) _____

ii) _____

c) Give any **one** way a Christian can avoid going to the place mentioned in (a) above.

Or:

a) Write down the place where sinners will go on the Day of Judgment.

b) Write down any **two** things that will cause people to go to the place mentioned in (a) above.

i) _____

ii) _____

c) What role will be played by Angel Israfeel on the Day of Judgment?

54. Either:

a) What is marriage?

b) Give any two factors to consider when choosing a marriage partner.

i) _____

ii) _____

c) Mention one reason why some marriages have failed.

Or:

a) What Nikkah?

b) Mention any **two** factors to consider when choosing a marriage partner.

i) _____

ii) _____

c) Mention one reason why some marriages have failed.

55. Either:

a) What prayer did Jesus Christ teach his disciples?

b) Give a reason why Christians need to pray

i) before meals _____

ii) before travelling _____

c) What lesson can you learn from Jesus' prayerful life?

Or:

a) What prayer do Muslims perform at Night during the month of Ramadhan?

b) Give a reason why Muslims need to pray,

i) before meals _____

ii) before travelling _____

c) What lesson can you learn from Prophet Muhammad's prayerful life?
